

1. What is the perimeter of this square?

14 inches



Perimeter Practice – PS

2. What is the perimeter of this rectangle?

7.35 feet

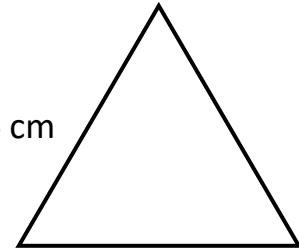
5.82 feet



Perimeter Practice – PS

3. What is the perimeter of this equilateral triangle?

6 cm



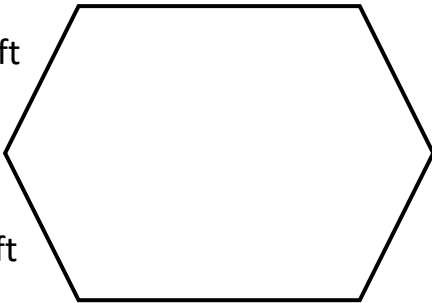
Perimeter Practice – PS

4. What is the perimeter of this hexagon?

4.5 ft

2.6 ft


2.6 ft



Perimeter Practice – PS

5. What is the perimeter of this square?

7.25 inches

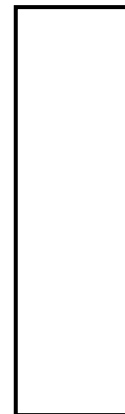


Perimeter Practice – PS

6. What is the perimeter of this rectangle?

2.2 ft

6.8 ft



Perimeter Practice – PS

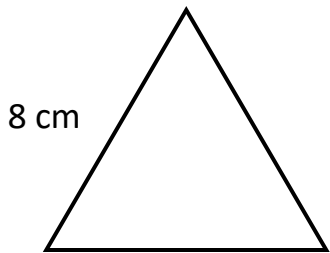
Unit: 5th – Perimeter, Area & Volume

Lesson: Perimeter Practice

Problem Set: 1

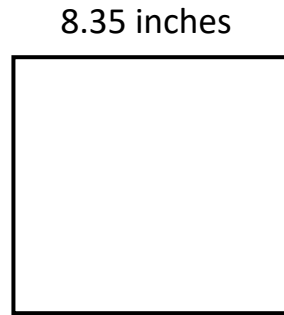
1 56	2 26.34	3 18	4 19.4	5 29	6 18
7 24	8 33.4	9 32.84	10 10.4	11 22	12 24.8
13 48.8	14 24	15 25	16 10	17 58	18 26
19 58	20 14	21 16.8	22 23.06	23 21.75	24 12
25 17.6	26 25.66	27 18.9	28 56	29 39.24	30 26

7. What is the perimeter of this equilateral triangle?



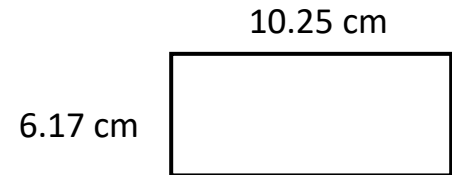
Perimeter Practice – PS

8. What is the perimeter of this square?



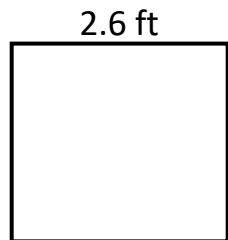
Perimeter Practice – PS

9. What is the perimeter of this rectangle?



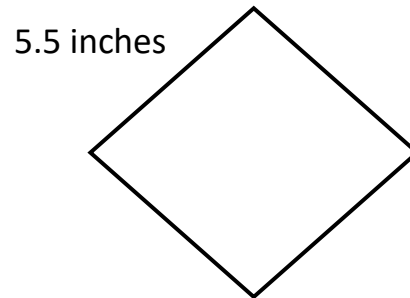
Perimeter Practice – PS

10. What is the perimeter of this square?



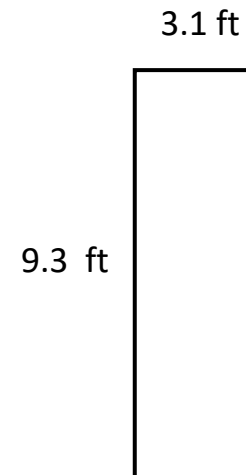
Perimeter Practice – PS

11. What is the perimeter of this rhombus?



Perimeter Practice – PS

12. What is the perimeter of this rectangle?



Perimeter Practice – PS

Unit: 5th – Perimeter, Area & Volume

Lesson: Perimeter Practice

Problem Set: 2

1 56	2 26.34	3 18	4 19.4	5 29	6 18
7 24	8 33.4	9 32.84	10 10.4	11 22	12 24.8
13 48.8	14 24	15 25	16 10	17 58	18 26
19 58	20 14	21 16.8	22 23.06	23 21.75	24 12
25 17.6	26 25.66	27 18.9	28 56	29 39.24	30 26

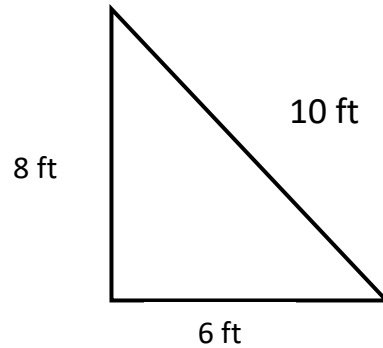
13. What is the perimeter of this rectangle?

14.13 inches



10.27 inches


14. What is the perimeter of this right triangle?



Perimeter Practice – PS

15. What is the perimeter of this square?

6.25 cm



Perimeter Practice – PS

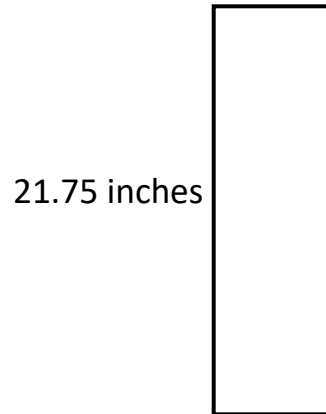
16. What is the perimeter of this square?

2.5 ft



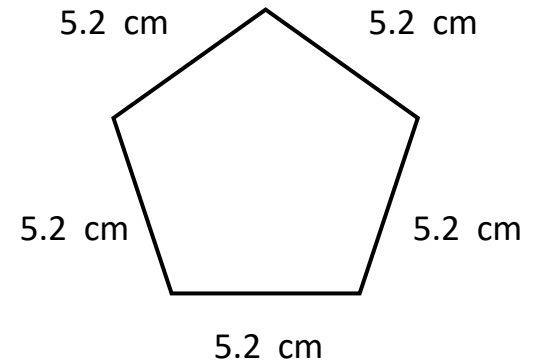
17. What is the perimeter of this rectangle?

7.25 inches



Perimeter Practice – PS

18. What is the perimeter of this pentagon?



Perimeter Practice – PS

Perimeter Practice – PS

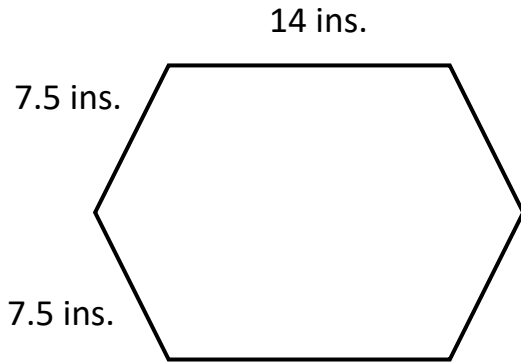
Unit: 5th – Perimeter, Area & Volume

Lesson: Perimeter Practice

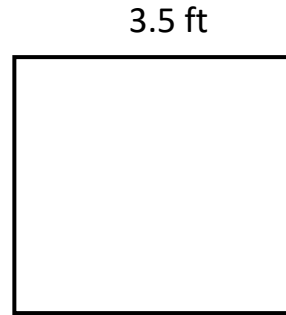
Problem Set: 3

1 56	2 26.34	3 18	4 19.4	5 29	6 18
7 24	8 33.4	9 32.84	10 10.4	11 22	12 24.8
13 48.8	14 24	15 25	16 10	17 58	18 26
19 58	20 14	21 16.8	22 23.06	23 21.75	24 12
25 17.6	26 25.66	27 18.9	28 56	29 39.24	30 26

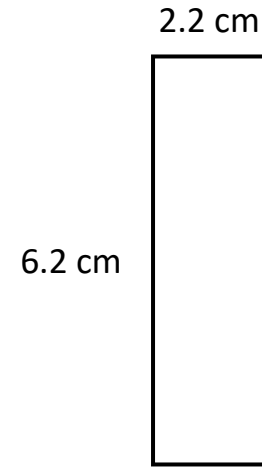
19. What is the perimeter of this hexagon?



20. What is the perimeter of this square?



21. What is the perimeter of this rectangle?

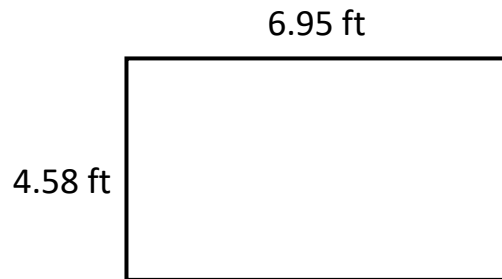


Perimeter Practice – PS

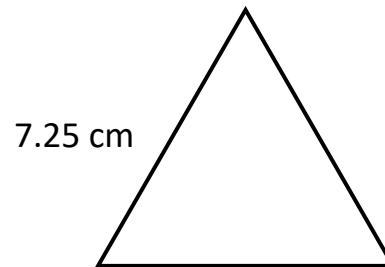
Perimeter Practice – PS

Perimeter Practice – PS

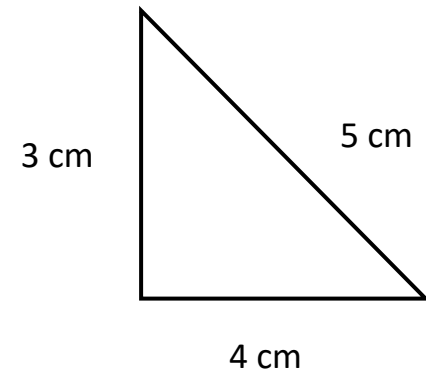
22. What is the perimeter of this rectangle?



23. What is the perimeter of this equilateral triangle?



24. What is the perimeter of this right triangle?



Perimeter Practice – PS

Perimeter Practice – PS

Perimeter Practice – PS

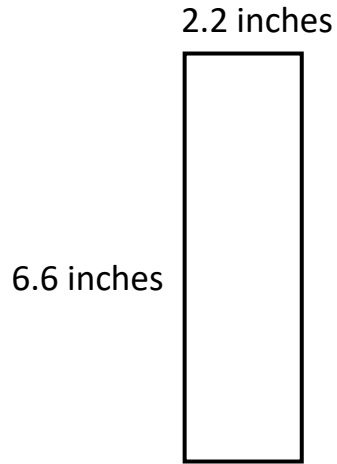
Unit: 5th – Perimeter, Area & Volume

Lesson: Perimeter Practice

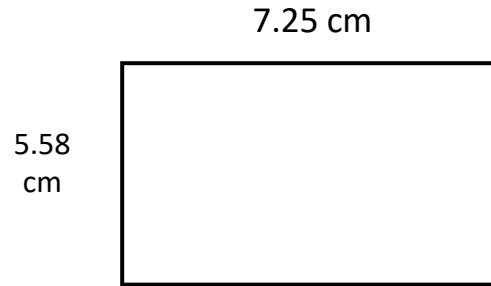
Problem Set: 4

1 56	2 26.34	3 18	4 19.4	5 29	6 18
7 24	8 33.4	9 32.84	10 10.4	11 22	12 24.8
13 48.8	14 24	15 25	16 10	17 58	18 26
19 58	20 14	21 16.8	22 23.06	23 21.75	24 12
25 17.6	26 25.66	27 18.9	28 56	29 39.24	30 26

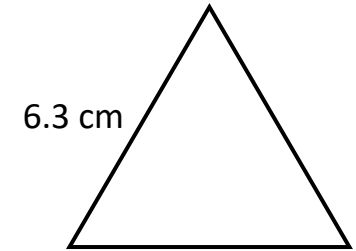
25. What is the perimeter of this rectangle?



26. What is the perimeter of this rectangle?



27. What is the perimeter of this equilateral triangle?

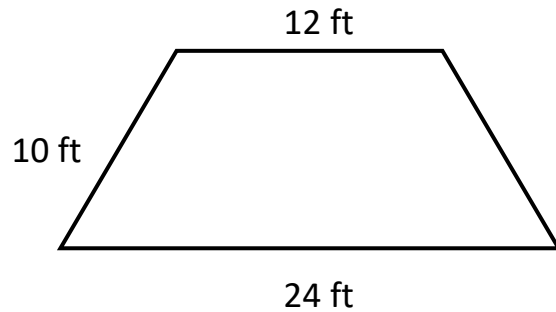


Perimeter Practice – PS

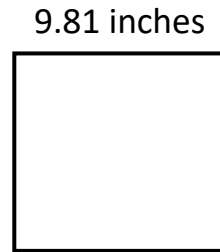
Perimeter Practice – PS

Perimeter Practice – PS

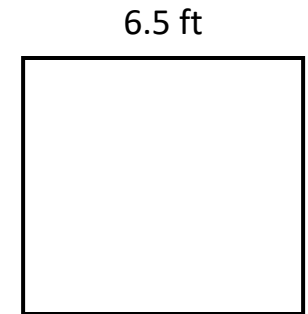
28. What is the perimeter of this trapezoid?



29. What is the perimeter of this square?



30. What is the perimeter of this square?



Perimeter Practice – PS

Perimeter Practice – PS

Perimeter Practice – PS

Unit: 5th – Perimeter, Area & Volume

Lesson: Perimeter Practice

Problem Set: 5

1 56	2 26.34	3 18	4 19.4	5 29	6 18
7 24	8 33.4	9 32.84	10 10.4	11 22	12 24.8
13 48.8	14 24	15 25	16 10	17 58	18 26
19 58	20 14	21 16.8	22 23.06	23 21.75	24 12
25 17.6	26 25.66	27 18.9	28 56	29 39.24	30 26